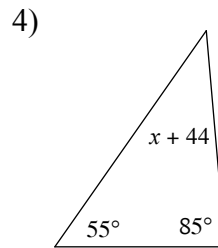
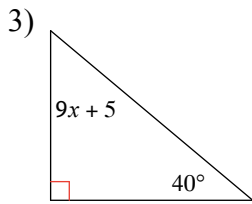
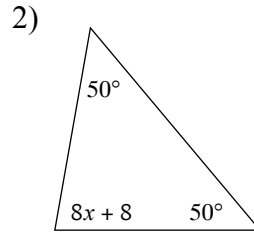
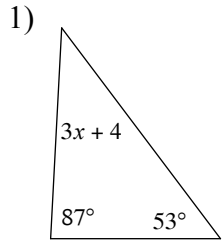


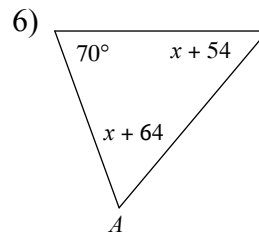
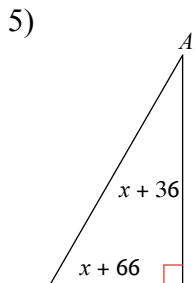
Triangle Sum & Exterior Angle Theorem

Name _____

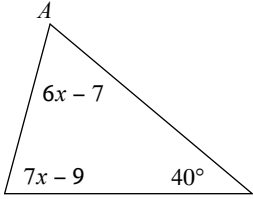
Solve for x .



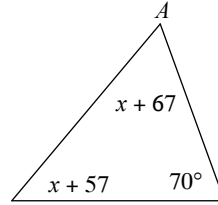
Find the measure of angle A.



7)

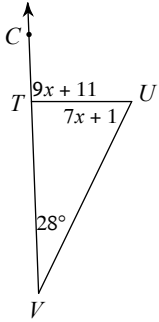


8)

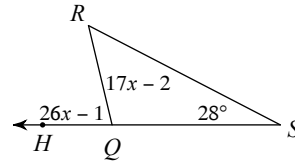


Solve for x .

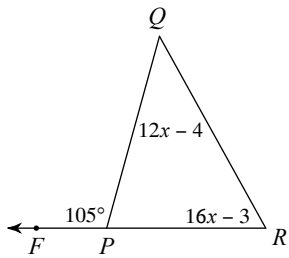
9)



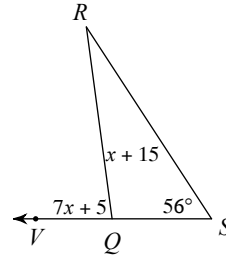
10)



11)



12)



Answers to

1) 12
5) 30°
9) 9

2) 9
6) 60°
10) 3

3) 5
7) 65°
11) 4

4) -4
8) 60°
12) 11